


PL - vianočné počítanie s jablčkami do 9

Meno: _____


1. Doplň do jablčok chýbajúce čísla.





2. Jadierka v jablčkách spočítaj a vyfarbi číslo so správnym počtom.

 <input type="radio"/> 1 <input type="radio"/> 2 <input type="radio"/> 3	 <input type="radio"/> 5 <input type="radio"/> 6 <input type="radio"/> 7
 <input type="radio"/> 3 <input type="radio"/> 4 <input type="radio"/> 5	 <input type="radio"/> 3 <input type="radio"/> 4 <input type="radio"/> 5
 <input type="radio"/> 4 <input type="radio"/> 5 <input type="radio"/> 6	 <input type="radio"/> 8 <input type="radio"/> 9 <input type="radio"/> 10

3. Porovnaj čísla v jablčkách.



	<input type="text"/>	
	<input type="text"/>	
	<input type="text"/>	
	<input type="text"/>	
	<input type="text"/>	
	<input type="text"/>	

4. Vypočítaj slovnú úlohu.

Kováčovci majú na vianočnom stole jablčka.

červené 3
 zelené..... 4
 žlté..... 2
 spolu..... ?

<input type="text"/>	<input type="text"/>	<input type="text"/>	<input type="text"/>	<input type="text"/>	<input type="text"/>	<input type="text"/>
----------------------	----------------------	----------------------	----------------------	----------------------	----------------------	----------------------

Kováčovci majú spolu jablčok.

5. Vypočítaj jablčkovú reťazovku.

$$\begin{array}{cccccccccccccccc}
 \text{Apple with 1 seed} & + & \text{Apple with 3 seeds} & = & \text{Apple} & + & \text{Apple with 5 seeds} & = & \text{Apple} & - & \text{Apple with 7 seeds} & = & \text{Apple} & + & \text{Apple with 4 seeds} & = & \text{Apple} & + & \text{Apple with 2 seeds} & = & \text{Apple} & - & \text{Apple with 6 seeds} & = & \text{Apple} & + & \text{Apple with 7 seeds} & = & \text{Apple}
 \end{array}$$

